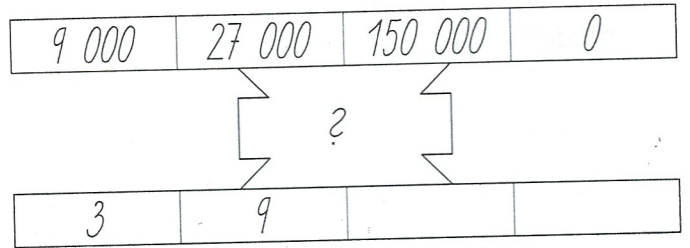
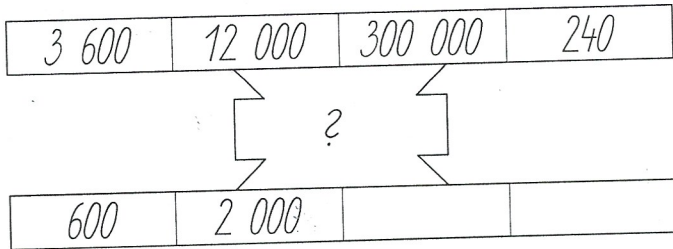
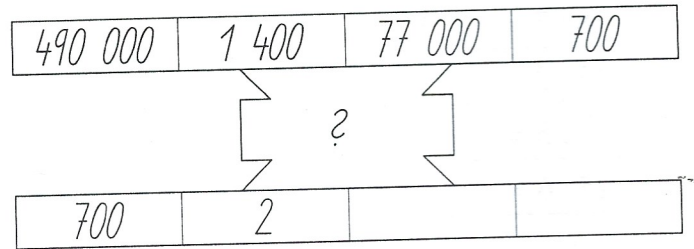
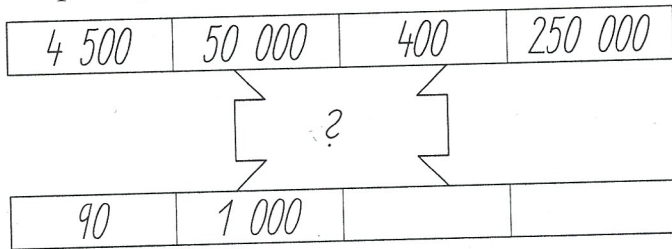
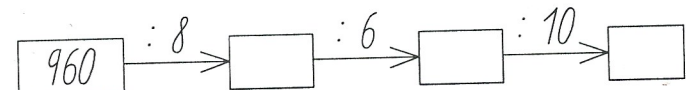
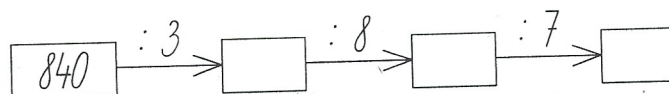
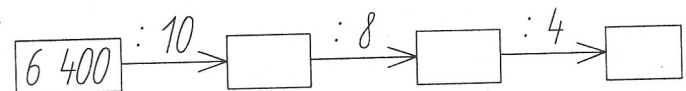
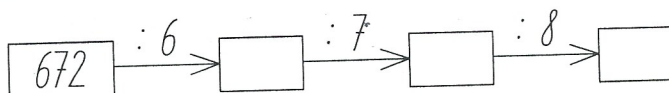
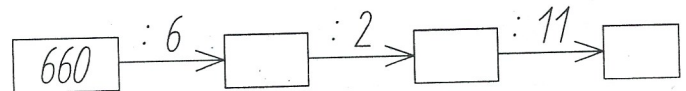
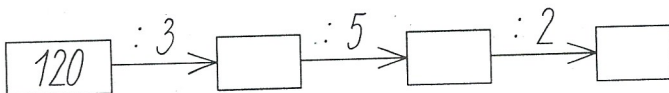
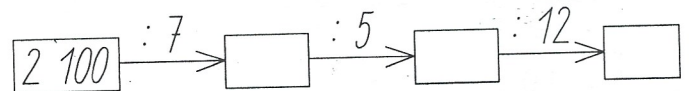



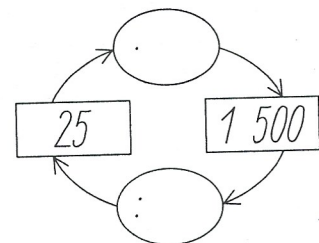
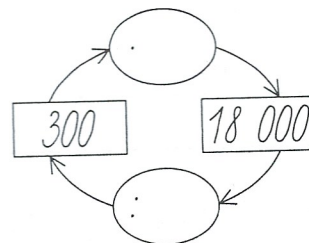
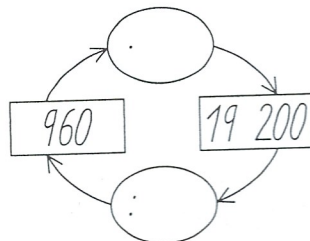
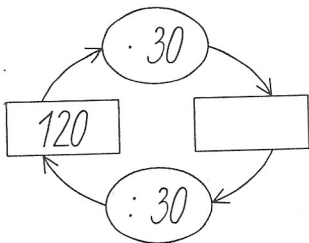
7. Jak počítají automaty? Dopln chybějící údaje.



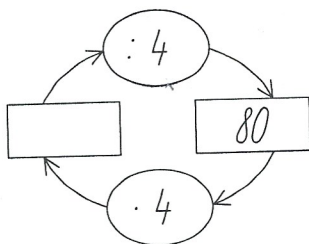
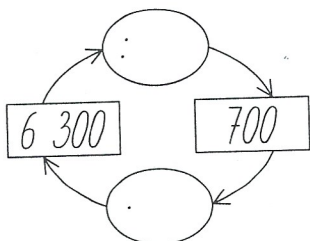
8. Dopln chybějící čísla.



9. Dopln schémata.



10. Dopln chybějící čísla.



6 300:	=	30
1 600:	=	20
84 000:	=	40
1 000:	=	40
	: 4 =	68
	: 31 =	30
	: 19 =	400
	: 700 =	53

3 600:	=	6
84 000:	=	12
380:	=	19
870:	=	29
	: 300 =	93
	: 700 =	13
	: 48 =	80
	: 9 =	49

540:	=	90
600:	=	50
58:	=	29
460:	=	230
	: 80 =	85
	: 50 =	93
	: 96 =	2
	: 600 =	84